
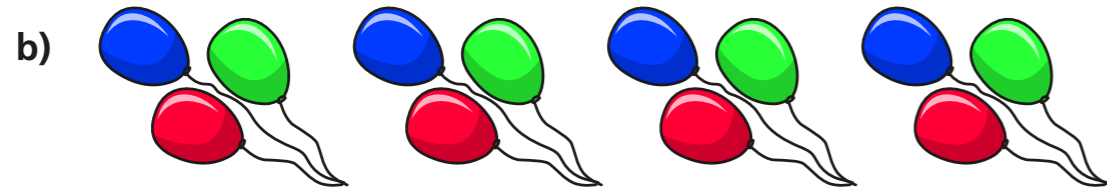


The 4 times-table

1 Complete the multiplication.



$$\square \times \square = \square$$



$$\square \times \square = \square$$

2 Complete the number sentences.

a) $6 \times 4 = \square$

g) $24 \div 4 = \square$

b) $4 \times 3 = \square$

h) $8 \div 4 = \square$

c) $\square = 7 \times 4$

i) $0 \div 4 = \square$

d) $4 \times \square = 48$

j) $\square \div 11 = 4$

e) $0 \times 4 = \square$


k) $\square \div 4 = 5$

f) $4 \times 9 = \square$

l) $1 \times 4 = \square$

3 What multiplication and division statements does the array represent?

Complete the statements.



$$\square \times \square = \square$$

$$\square \times \square = \square$$

$$\square \div \square = \square$$

$$\square \div \square = \square$$

4 Complete the number sentences.

a) $2 \times 4 = \square$

c) $3 \times 4 = \square$

$4 \times 4 = \square$

$3 \times 8 = \square$

$8 \times 4 = \square$

$3 \times 12 = \square$

b) $8 = 4 \times \square$

$16 = 4 \times \square$

$32 = 4 \times \square$

What patterns do you notice?



5 Write $<$, $>$ or $=$ to compare the statements.

a) $48 \div 12$ 4

d) $4 \div 4$ 4×4

b) 36 $40 \div 4$

e) 1×4 4×1

c) $16 \div 4$ 4×4

f) 4×2 $32 \div 4$

6 A paper clip is 4 cm long.



How long are 6 of these paper clips?

7 Dexter buys 10 mugs and 4 key rings.
How much money does he spend in total?




8 The pictogram shows the animals a group of children have as pets.

Complete the pictogram.

Animal	Pictogram	Number of animals
cat		
dog		28
bird		
mouse		


= 4 animals

9



Teddy

Some of the numbers in the 4 times-table are even, but not all of them.



Eva

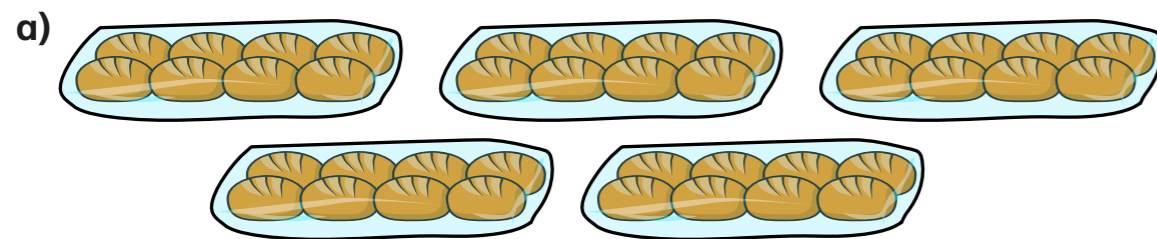
All numbers in the 4 times-table are even.

Who is correct? _____

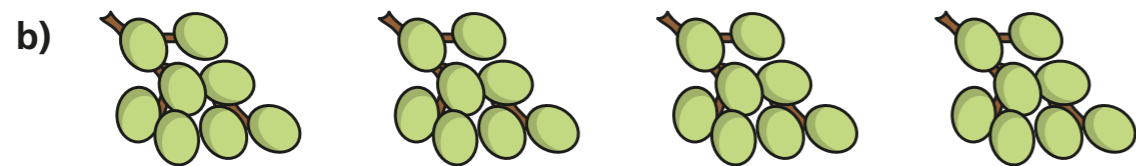
How do you know? Talk about it with a partner.

The 8 times-table

1 How many are there in total?
Complete the multiplications.



$$\square \times \square = \square$$



$$\square \times \square = \square$$

2 Complete the number tracks.


a)

0	8	16	24				
---	---	----	----	--	--	--	--

b)

96	88	80					
----	----	----	--	--	--	--	--

3 Here is an array made up of triangles.



a) What multiplication sentence can you see?

$$\square \times \square = \square$$

b) What division sentence can you see?

$$\square \div \square = \square$$

4 Complete the calculations.

Try to do the calculations in your head.

a) $6 \times 8 = \square$

e) $72 \div 8 = \square$

b) $8 \times \square = 56$

f) $\square \div 11 = 8$

c) $10 \times 8 = \square$

g) $\square \div 8 = 5$

d) $\square = 8 \times 4$

h) $8 \times 1 = \square$

